

MATHEMATICS

Answers
Year 3 | Unit 1

Match three-digit representations

Resource 3

Write the number to match the words.

four hundred and ninety-five


495

Draw MAB to match the number.

two hundred and twenty-three



Write a number in digits to match the MAB.




345

Write this number on the number expander.

157

1	hundreds	5	tens	7	ones
---	----------	---	------	---	------



MATHEMATICS

Answers
Year 3 | Unit 1

Match three-digit representations

Resource 3


Draw MAB to match the number.

544

Write the words to match the number.

647

six hundred and forty-seven

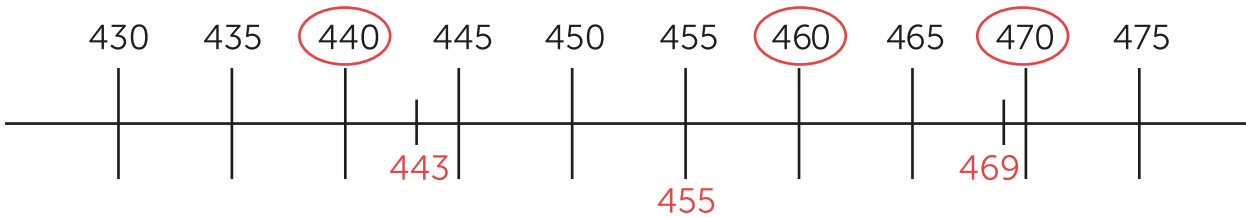


Rounding three-digit numbers to the nearest ten and hundred

Resource 6

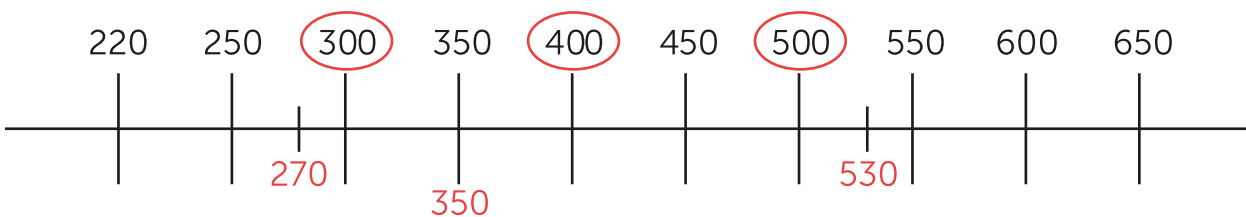
Use the number lines to help you round to the nearest ten or hundred.

Rounding to the nearest ten




1. Mark **443** on the number line.
Would you round 443 to 440 or 450? **440**
2. Mark **469** on the number line.
Would you round 469 to 460 or 470? **470**
3. Mark **455** on the number line.
Would you round 455 to 450 or 460? **460**

Rounding to the nearest hundred



4. Mark **270** on the number line.
Would you round 270 to 200 or 300? **300**
5. Mark **530** on the number line.
Would you round 530 to 500 or 600? **500**
6. Mark **350** on the number line.
Would you round 350 to 300 or 400? **400**




MATHEMATICS

Number sequences: Mix and match

Resource 7

Counting sequence	Pattern rule
____ / ____ / ____ / ____ / ____ / ____ / ____	
23, 29, 35, 41, 47, 53, 59	+ 6
49, 47, 45, 43, 41, 39, 37	- 2
18, 23, 28, 33, 38, 43, 48	+ 5
71, 74, 77, 80, 83, 86, 89	+ 3
50, 47, 44, 41, 38, 35, 32	- 3
35, 31, 27, 23, 19, 15, 11	- 4



MATHEMATICS

Number pattern scramble

Resource 8

Set A

5	10	15	20	25
30	35	40	45	50

Set B

3	6	9	12	15
18	21	24	27	30